

Rising Third Grade Summer Math Packet

2023 - 2024

Name _____

Directions:

- ~ Complete each page of the packet
- ~ Be sure to read the directions carefully
- ~ Pay close attention to the examples given
- ~ Show your work
- ~ Your completed packet is due by Thursday, September 7, 2023
- ~ Try to do some work each week of summer so you don't fall behind

Name _____

FACT FAMILIES

Directions: Write the two addition and two subtraction sentences for each group of numbers.

Example:

| | |
|--------------|----|
| 8 | |
| 7 | 15 |
| $7 + 8 = 15$ | |
| $8 + 7 = 15$ | |
| $15 - 7 = 8$ | |
| $15 - 8 = 7$ | |

| | |
|----------------|----|
| 9 | |
| 6 | 15 |
| $_ + _ = _$ | |
| $_ + _ = _$ | |
| $_ - _ = _$ | |
| $_ - _ = _$ | |


| | |
|----------------|----|
| 4 | |
| 8 | 12 |
| $_ + _ = _$ | |
| $_ + _ = _$ | |
| $_ - _ = _$ | |
| $_ - _ = _$ | |

| | |
|----------------|----|
| 5 | |
| 9 | 16 |
| $_ + _ = _$ | |
| $_ + _ = _$ | |
| $_ - _ = _$ | |
| $_ - _ = _$ | |

| | |
|----------------|---|
| 11 | |
| 7 | 4 |
| $_ + _ = _$ | |
| $_ + _ = _$ | |
| $_ - _ = _$ | |
| $_ - _ = _$ | |

| | |
|----------------|---|
| 14 | |
| 6 | 8 |
| $_ + _ = _$ | |
| $_ + _ = _$ | |
| $_ - _ = _$ | |
| $_ - _ = _$ | |

| | |
|----------------|----|
| 6 | |
| 7 | 13 |
| $_ + _ = _$ | |
| $_ + _ = _$ | |
| $_ - _ = _$ | |
| $_ - _ = _$ | |



Name _____

FACT FAMILIES

Directions: Write the two addition and two subtraction sentences for each group of numbers.

8
5 13

____ + ____ = ____
____ + ____ = ____
____ - ____ = ____
____ - ____ = ____

5
6 11

____ + ____ = ____
____ + ____ = ____
____ - ____ = ____
____ - ____ = ____

5
7 12

____ + ____ = ____
____ + ____ = ____
____ - ____ = ____
____ - ____ = ____

9
7 16

____ + ____ = ____
____ + ____ = ____
____ - ____ = ____
____ - ____ = ____

11
6 5


____ + ____ = ____
____ + ____ = ____
____ - ____ = ____
____ - ____ = ____

14
3 9

____ + ____ = ____
____ + ____ = ____
____ - ____ = ____
____ - ____ = ____

9
8 17

____ + ____ = ____
____ + ____ = ____
____ - ____ = ____
____ - ____ = ____



Name _____

SUBTRACT THOSE NUMBERS

Directions: Solve each problem.

$$\begin{array}{r} 33 \\ -21 \\ \hline \end{array}$$

$$\begin{array}{r} 51 \\ -35 \\ \hline \end{array}$$

$$\begin{array}{r} 73 \\ -21 \\ \hline \end{array}$$

$$\begin{array}{r} 50 \\ -23 \\ \hline \end{array}$$

$$\begin{array}{r} 54 \\ -36 \\ \hline \end{array}$$

$$\begin{array}{r} 65 \\ -12 \\ \hline \end{array}$$

$$\begin{array}{r} 91 \\ -16 \\ \hline \end{array}$$

$$\begin{array}{r} 36 \\ -16 \\ \hline \end{array}$$

$$\begin{array}{r} 40 \\ -16 \\ \hline \end{array}$$

$$\begin{array}{r} 18 \\ -10 \\ \hline \end{array}$$

$$\begin{array}{r} 76 \\ -16 \\ \hline \end{array}$$

$$\begin{array}{r} 62 \\ -10 \\ \hline \end{array}$$

$$\begin{array}{r} 60 \\ -30 \\ \hline \end{array}$$

$$\begin{array}{r} 80 \\ -18 \\ \hline \end{array}$$

$$\begin{array}{r} 40 \\ -35 \\ \hline \end{array}$$

$$\begin{array}{r} 73 \\ -69 \\ \hline \end{array}$$

$$\begin{array}{r} 32 \\ -18 \\ \hline \end{array}$$

$$\begin{array}{r} 42 \\ -15 \\ \hline \end{array}$$

$$\begin{array}{r} 71 \\ -36 \\ \hline \end{array}$$

$$\begin{array}{r} 36 \\ -22 \\ \hline \end{array}$$




Name _____

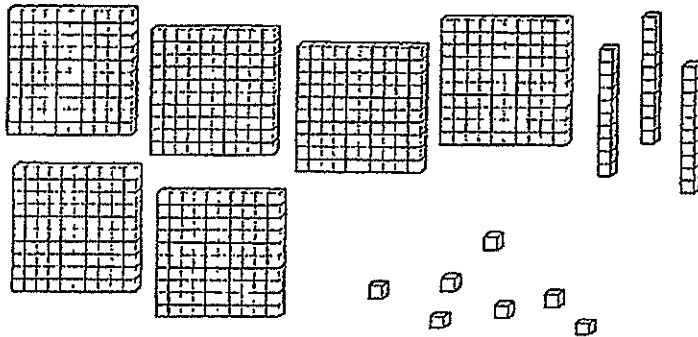
What time is it?



How much money is this?



What is this number?



Write this number in

813

Expanded Form:

Word Form:

Is this number even or odd?

604

Use < or >

234 ○ 432

514 ○ 414


647 ○ 674

341

+362

Name _____

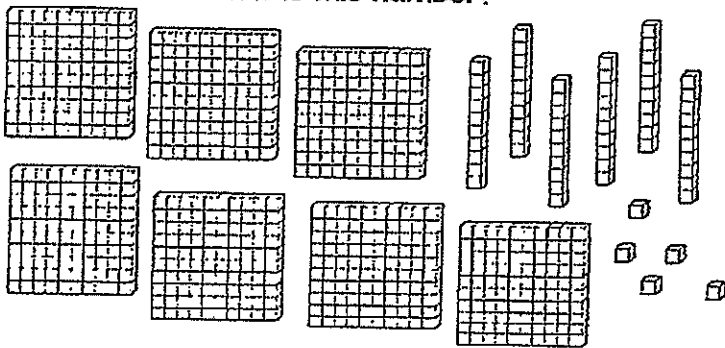
What time is it?



How much money is this?



What is this number?



Write this number in

354

Expanded Form:

Word Form:

Is this number even or odd?

418

Use < or >

531 ○ 622

145 ○ 635

321 ○ 302

683
+ 196
